





# Grocery Store Math Fun Sheet

Chef Solus is at the Solus Grocery Store buying a few items for dinner.  
Can you help Chef Solus find the prices for each item in his cart?






1) Write it's price on the blank line and then add the total.

1)            \$12.00              2)            .85¢              3)            .55¢          

2) How much did Chef Solus spend?



           \$12.00            
           .85¢            
 +           .55¢            
          \$13.40          

